









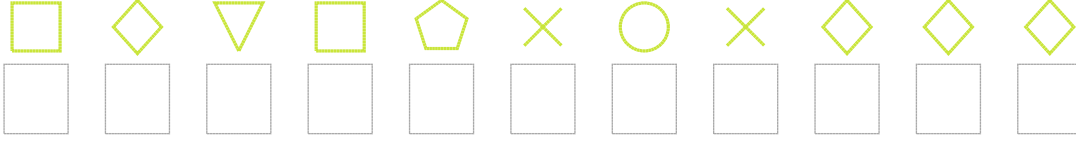


Şekil Sayı Eşleştirme

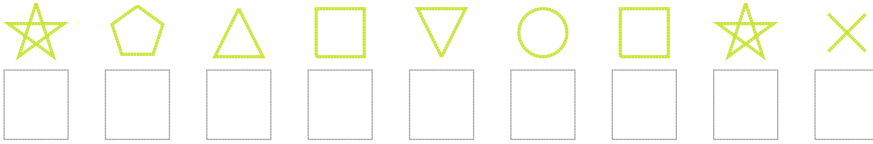
									
= 8	= 6	= 5	= 9	= 4	= 7	= 0	= 3	= 2	= 1

Aşağıdaki uzun şifreleri hatasız çözerek altlarına yazın:


1. Şifre



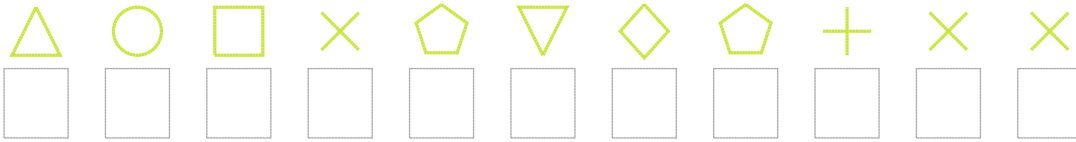
2. Şifre



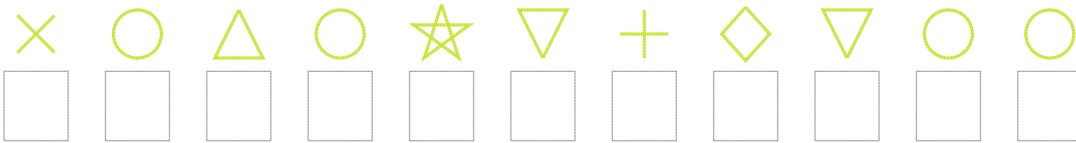
3. Şifre



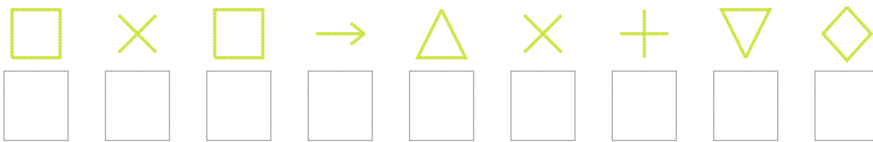
4. Şifre



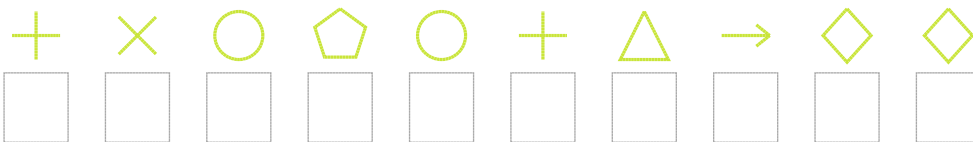
5. Şifre



6. Şifre



7. Şifre



❑ BONUS: 2. ve 1. şifrenin ikinci rakamının toplamı kaçtır?

Cevap Anahtarı

1. Şifre: 02607393222
2. Şifre: 875069083
3. Şifre: 9894298614589
4. Şifre: 59037627433
5. Şifre: 39598642699
6. Şifre: 030153462
7. Şifre: 4397945122

□ Bonus Soru Cevabı: 9